















MINISTRY OF EDUCATION
PRIMARY ENGAGEMENT PROGRAMME
GRADE ONE WORKSHEET
SUBJECT: MATHEMATICS
LESSON: REVIEW WEEK 3
TOPIC: ADDITION AND SUBTRACTION

Name: _____ Date: _____

Complete the activity.

		WORKING OUT
1)	I have 4  . I buy 3  more. How many do I have now? _____	
2)	There are 5  . 4  fly away. How many are left? _____	
3)	I have 2  . I buy 5  more. How many  in all? _____	
4)	Jack has 3  . Jill has 3  . How many altogether? _____	
5)	There are 8  . 2  swim away. How many  are left? _____	